

Name: _____ Period: _____ Date: _____

Graphing a Function Rule Bell Work

Graph each function rule.

1) $y = 2x + 1$

2) $y = \frac{x}{4} + 1$

3) $y = |2x| + 1.5$

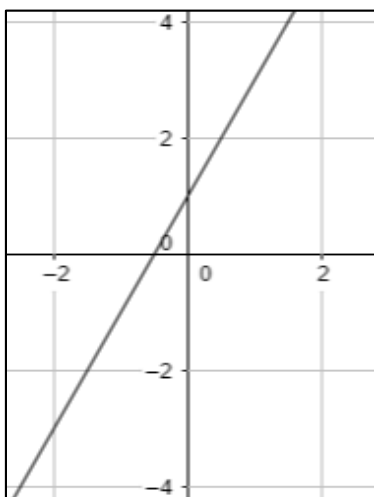
4) $y = 1.5x^2 + 2$

Graphing a Function Rule Bell Work

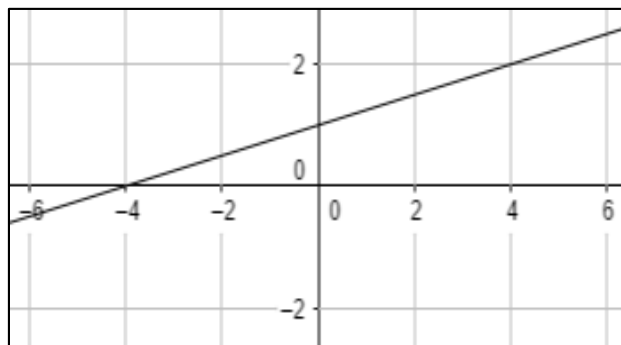
Answer Key

Graph each function rule.

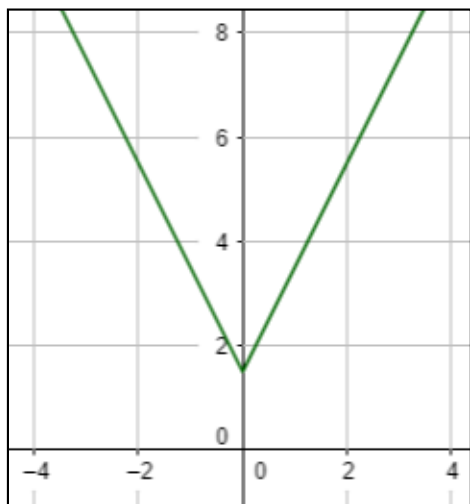
1) $y = 2x + 1$



2) $y = \frac{x}{4} + 1$



3) $y = |2x| + 1.5$



4) $y = 1.5x^2 + 2$

